

HERON'S FORMULA

(A) Main Concepts and Results

- **Rectangle**

- (a) Area = length \times breadth
- (b) Perimeter = 2 (length + breadth)
- (c) Diagonal = $\sqrt{(\text{length})^2 + (\text{breadth})^2}$

- **Square**

- (a) Area = (side)²
- (b) Perimeter = 4 \times side
- (c) Diagonal = $\sqrt{2}$ \times side

- **Triangle with base (b) and altitude (h)**

$$\text{Area} = \frac{1}{2} \times b \times h$$

- **Triangle with sides as a, b, c**

- (i) Semi-perimeter = $\frac{a + b + c}{2} = s$
- (ii) Area = $\sqrt{s(s-a)(s-b)(s-c)}$ (Heron's Formula)

- **Isosceles triangle, with base a and equal sides b**

$$\text{Area of isosceles triangle} = \frac{a}{4} \sqrt{4b^2 - a^2}$$

- **Equilateral triangle with side a**

$$\text{Area} = \frac{\sqrt{3}}{4} a^2$$

- **Parallelogram with base b and altitude h**

$$\text{Area} = bh$$

- **Rhombus with diagonals d_1 and d_2**

$$(a) \quad \text{Area} = \frac{1}{2} d_1 \times d_2$$

$$(b) \quad \text{Perimeter} = 2\sqrt{d_1^2 + d_2^2}$$

- **Trapezium with parallel sides a and b , and the distance between two parallel sides as h .**

$$\text{Area} = \frac{1}{2} (a + b) \times h$$

- **Regular hexagon with side a**

$$\text{Area} = 6 \times \text{Area of an equilateral triangle with side } a$$

$$= 6 \times \frac{\sqrt{3}}{4} a^2 = \frac{3}{2} \sqrt{3} a^2$$

(B) Multiple Choice Questions

Write the correct answer:

Sample Question 1 : The base of a right triangle is 8 cm and hypotenuse is 10 cm. Its area will be

- (A) 24 cm² (B) 40 cm² (C) 48 cm² (D) 80 cm²

Solution : Answer (A)

EXERCISE 12.1

1. An isosceles right triangle has area 8 cm². The length of its hypotenuse is

- (A) $\sqrt{32}$ cm (B) $\sqrt{16}$ cm (C) $\sqrt{48}$ cm (D) $\sqrt{24}$ cm

2. The perimeter of an equilateral triangle is 60 m. The area is
 (A) $10\sqrt{3} \text{ m}^2$ (B) $15\sqrt{3} \text{ m}^2$ (C) $20\sqrt{3} \text{ m}^2$ (D) $100\sqrt{3} \text{ m}^2$
3. The sides of a triangle are 56 cm, 60 cm and 52 cm long. Then the area of the triangle is
 (A) 1322 cm^2 (B) 1311 cm^2 (C) 1344 cm^2 (D) 1392 cm^2
4. The area of an equilateral triangle with side $2\sqrt{3}$ cm is
 (A) 5.196 cm^2 (B) 0.866 cm^2 (C) 3.496 cm^2 (D) 1.732 cm^2
5. The length of each side of an equilateral triangle having an area of $9\sqrt{3} \text{ cm}^2$ is
 (A) 8 cm (B) 36 cm (C) 4 cm (D) 6 cm
6. If the area of an equilateral triangle is $16\sqrt{3} \text{ cm}^2$, then the perimeter of the triangle is
 (A) 48 cm (B) 24 cm (C) 12 cm (D) 36 cm
7. The sides of a triangle are 35 cm, 54 cm and 61 cm, respectively. The length of its longest altitude
 (A) $16\sqrt{5}$ cm (B) $10\sqrt{5}$ cm (C) $24\sqrt{5}$ cm (D) 28 cm
8. The area of an isosceles triangle having base 2 cm and the length of one of the equal sides 4 cm, is
 (A) $\sqrt{15} \text{ cm}^2$ (B) $\sqrt{\frac{15}{2}} \text{ cm}^2$ (C) $2\sqrt{15} \text{ cm}^2$ (D) $4\sqrt{15} \text{ cm}^2$
9. The edges of a triangular board are 6 cm, 8 cm and 10 cm. The cost of painting it at the rate of 9 paise per cm^2 is
 (A) Rs 2.00 (B) Rs 2.16 (C) Rs 2.48 (D) Rs 3.00

(C) Short Answer Questions with Reasoning

Write **True** or **False** and justify your answer:

Sample Question 1 : If a, b, c are the lengths of three sides of a triangle, then area of a triangle = $\sqrt{s(s-a)(s-b)(s-c)}$, where s = perimeter of triangle.

Solution : False. Since in Heron's formula,

$$s = \frac{1}{2}(a+b+c)$$

$$= \frac{1}{2} (\text{perimeter of triangle})$$

EXERCISE 12.2

Write **True** or **False** and justify your answer:

1. The area of a triangle with base 4 cm and height 6 cm is 24 cm^2 .
2. The area of ΔABC is 8 cm^2 in which $AB = AC = 4 \text{ cm}$ and $\angle A = 90^\circ$.
3. The area of the isosceles triangle is $\frac{5}{4}\sqrt{11} \text{ cm}^2$, if the perimeter is 11 cm and the base is 5 cm.
4. The area of the equilateral triangle is $20\sqrt{3} \text{ cm}^2$ whose each side is 8 cm.
5. If the side of a rhombus is 10 cm and one diagonal is 16 cm, the area of the rhombus is 96 cm^2 .
6. The base and the corresponding altitude of a parallelogram are 10 cm and 3.5 cm, respectively. The area of the parallelogram is 30 cm^2 .
7. The area of a regular hexagon of side 'a' is the sum of the areas of the five equilateral triangles with side a.
8. The cost of levelling the ground in the form of a triangle having the sides 51 m, 37 m and 20 m at the rate of Rs 3 per m^2 is Rs 918.
9. In a triangle, the sides are given as 11 cm, 12 cm and 13 cm. The length of the altitude is 10.25 cm corresponding to the side having length 12 cm.

(D) Short Answer Questions

Sample Question 1 : The sides of a triangular field are 41 m, 40 m and 9 m. Find the number of rose beds that can be prepared in the field, if each rose bed, on an average needs 900 cm^2 space.

Solution : Let $a = 41 \text{ m}$, $b = 40 \text{ m}$, $c = 9 \text{ m}$.

$$s = \frac{a+b+c}{2} = \frac{41+40+9}{2} \text{ m} = 45 \text{ m}$$

Area of the triangular field

$$\begin{aligned}
 &= \sqrt{s(s-a)(s-b)(s-c)} \\
 &= \sqrt{45(45-41)(45-40)(45-9)} \\
 &= \sqrt{45 \times 4 \times 5 \times 36} = 180 \text{ m}^2
 \end{aligned}$$

So, the number of rose beds = $\frac{180}{0.09} = 2000$

Sample Question 2 : Calculate the area of the shaded region in Fig. 12.1.

Solution : For the triangle having the sides 122 m, 120 m and 22 m :

$$s = \frac{122 + 120 + 22}{2} = 132$$

$$\begin{aligned}
 \text{Area of the triangle} &= \sqrt{s(s-a)(s-b)(s-c)} \\
 &= \sqrt{132(132-122)(132-120)(132-22)} \\
 &= \sqrt{132 \times 10 \times 12 \times 110} \\
 &= 1320 \text{ m}^2
 \end{aligned}$$

For the triangle having the sides 22 m, 24 m and 26 m:

$$s = \frac{22 + 24 + 26}{2} = 36$$

$$\begin{aligned}
 \text{Area of the triangle} &= \sqrt{36(36-22)(36-24)(36-26)} \\
 &= \sqrt{36 \times 14 \times 12 \times 10} \\
 &= 24\sqrt{105} \\
 &= 24 \times 10.25 \text{ m}^2 \text{ (approx.)} \\
 &= 246 \text{ m}^2
 \end{aligned}$$

Therefore, the area of the shaded portion

$$\begin{aligned}
 &= (1320 - 246) \text{ m}^2 \\
 &= 1074 \text{ m}^2
 \end{aligned}$$

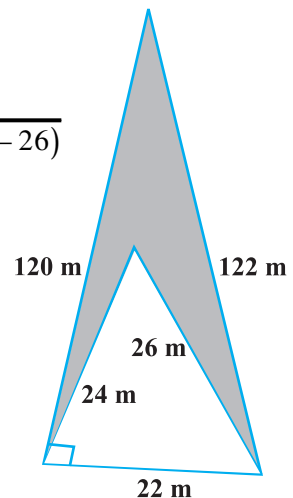


Fig. 12.1

EXERCISE 12.3

- Find the cost of laying grass in a triangular field of sides 50 m, 65 m and 65 m at the rate of Rs 7 per m^2 .
- The triangular side walls of a flyover have been used for advertisements. The sides of the walls are 13 m, 14 m and 15 m. The advertisements yield an earning of Rs 2000 per m^2 a year. A company hired one of its walls for 6 months. How much rent did it pay?
- From a point in the interior of an equilateral triangle, perpendiculars are drawn on the three sides. The lengths of the perpendiculars are 14 cm, 10 cm and 6 cm. Find the area of the triangle.
- The perimeter of an isosceles triangle is 32 cm. The ratio of the equal side to its base is 3 : 2. Find the area of the triangle.
- Find the area of a parallelogram given in Fig. 12.2. Also find the length of the altitude from vertex A on the side DC.
- A field in the form of a parallelogram has sides 60 m and 40 m and one of its diagonals is 80 m long. Find the area of the parallelogram.
- The perimeter of a triangular field is 420 m and its sides are in the ratio 6 : 7 : 8. Find the area of the triangular field.
- The sides of a quadrilateral ABCD are 6 cm, 8 cm, 12 cm and 14 cm (taken in order) respectively, and the angle between the first two sides is a right angle. Find its area.
- A rhombus shaped sheet with perimeter 40 cm and one diagonal 12 cm, is painted on both sides at the rate of Rs 5 per m^2 . Find the cost of painting.
- Find the area of the trapezium PQRS with height PQ given in Fig. 12.3

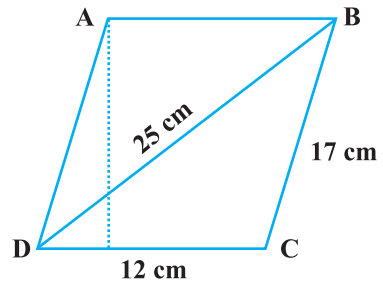


Fig. 12.2

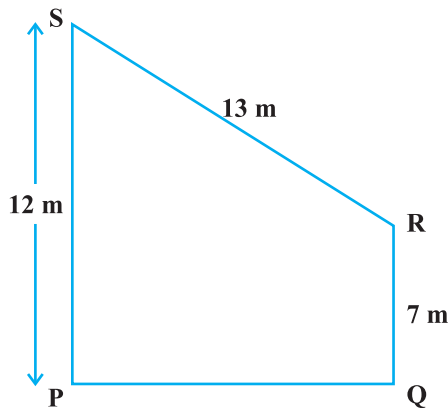


Fig. 12.3

(E) Long Answer Questions

Sample Question 1 : If each side of a triangle is doubled, then find the ratio of area of the new triangle thus formed and the given triangle.

Solution : Let a, b, c be the sides of the triangle (existing) and s be its semi-perimeter.

$$\text{Then, } s = \frac{a+b+c}{2}$$

$$\text{or, } 2s = a + b + c \quad (1)$$

$$\text{Area of the existing triangle} = \sqrt{s(s-a)(s-b)(s-c)} = \Delta, \text{ say}$$

According to the statement, the sides of the new triangle will be $2a, 2b$ and $2c$. Let S be the semi-perimeter of the new triangle.

$$S = \frac{2a+2b+2c}{2} = a+b+c \quad (2)$$

From (1) and (2), we get

$$S = 2s \quad (3)$$

Area of the new triangle

$$= \sqrt{S(S-2a)(S-2b)(S-2c)}$$

Putting the values, we get

$$= \sqrt{2s(2s-2a)(2s-2b)(2s-2c)}$$

$$= \sqrt{16s(s-a)(s-b)(s-c)}$$

$$= 4\sqrt{s(s-a)(s-b)(s-c)} = 4\Delta$$

Therefore, the required ratio is 4:1.

EXERCISE 12.4

1. How much paper of each shade is needed to make a kite given in Fig. 12.4, in which ABCD is a square with diagonal 44 cm.

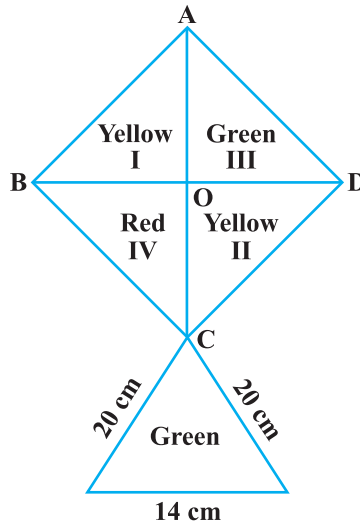


Fig. 12.4

2. The perimeter of a triangle is 50 cm. One side of a triangle is 4 cm longer than the smaller side and the third side is 6 cm less than twice the smaller side. Find the area of the triangle.
3. The area of a trapezium is 475 cm^2 and the height is 19 cm. Find the lengths of its two parallel sides if one side is 4 cm greater than the other.
4. A rectangular plot is given for constructing a house, having a measurement of 40 m long and 15 m in the front. According to the laws, a minimum of 3 m, wide space should be left in the front and back each and 2 m wide space on each of other sides. Find the largest area where house can be constructed.
5. A field is in the shape of a trapezium having parallel sides 90 m and 30 m. These sides meet the third side at right angles. The length of the fourth side is 100 m. If it costs Rs 4 to plough 1 m^2 of the field, find the total cost of ploughing the field.

6. In Fig. 12.5, ΔABC has sides $AB = 7.5 \text{ cm}$, $AC = 6.5 \text{ cm}$ and $BC = 7 \text{ cm}$. On base BC a parallelogram DBCE of same area as that of ΔABC is constructed. Find the height DF of the parallelogram.

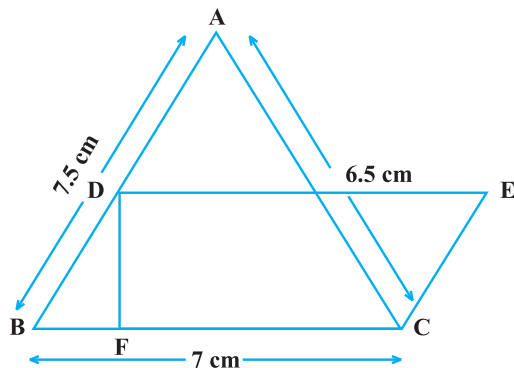


Fig. 12.5

7. The dimensions of a rectangle ABCD are $51 \text{ cm} \times 25 \text{ cm}$. A trapezium PQCD with its parallel

sides QC and PD in the ratio 9 : 8, is cut off from the rectangle as shown in the Fig. 12.6. If the area of the trapezium PQCD is $\frac{5}{6}$ th part of the area of the rectangle, find the lengths QC and PD.

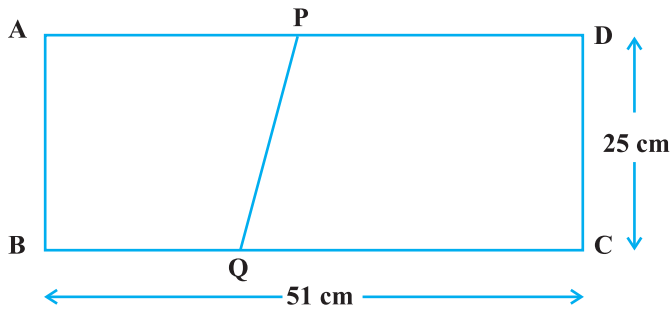


Fig. 12.6

8. A design is made on a rectangular tile of dimensions 50 cm \times 70 cm as shown in Fig. 12.7. The design shows 8 triangles, each of sides 26 cm, 17 cm and 25 cm. Find the total area of the design and the remaining area of the tile.

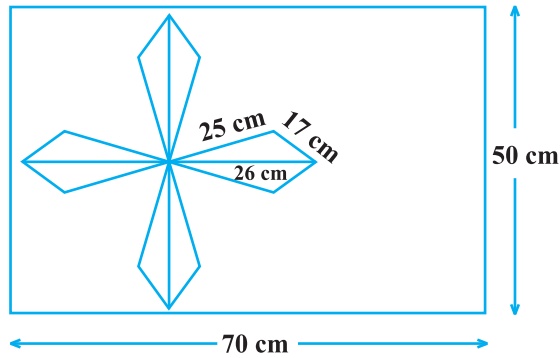


Fig. 12.7